



Sketchup Worksheet

Activity 1: Assignment

After completing Activities 1-1, 1-2, and 1-3, answer these questions.

Record the answers on the worksheet

1. Two dimensional modeling is limited to the _____ they are drawn on.
2. Three dimensional modeling is like pulling your object off the _____.
3. What is the name of this tool?  _____
4. How do you zoom in and out using the zoom tool and your mouse?

5. What is the name of this tool?  _____
6. Name Sketchup's 3 Navigation Tools: _____

7. What does the push-pull tool do to flat (2 dimensional) objects?

8. Create the end sample as shown on the 15th Tutorial Page (15th Tab) and print it out to hand in with your module.

Assignment 2c:

Instructions: Watch the **Activity 2 Introductory Video**, then answer each question.

1. The snap to line helps you put things where you want. A when it snaps vertically, the line is:
 - a. Red
 - b. Blue
 - c. Green
 - d. Black

2. The snap to line helps you put things where you want. A when it snaps horizontally, the line is:
 - a. Red and Green
 - b. Blue and Green
 - c. Green and Black
 - d. Black



3. You can get rid of an operation that you just completed by clicking:
 - a. Undo
 - b. Redo
 - c. Exit
 - d. Pan

4. Sketchup makes drawing easy with reference points. An example of reference points:
 - a. Mid-point
 - b. end-point
 - c. On-edge points
 - d. All of the above

5. Which tool would you use to easily add a third dimension (depth) to any surface:
 - a. Orbit
 - b. Circle
 - c. Rectangle
 - d. Follow me

6. The shortcut on the mouse to **zoom** in is:
 - a. Push the scroll wheel down and press the shift key
 - b. Push the scroll wheel down
 - c. Scroll wheel on mouse
 - d. All of these

7. The shortcut on the mouse to **Pan** in is:
 - a. Push the scroll wheel down and press the shift key

- b. Push the scroll wheel down
 - c. Scroll wheel on mouse
 - d. All of these
8. The shortcut on the mouse to **Orbit** in is:
- a. Push the scroll wheel down and press the shift key
 - b. Push the scroll wheel down
 - c. Scroll wheel on mouse
 - d. All of these
9. What is the name of this tool: 
- a. Orbit
 - b. Circle
 - c. Pan
 - d. Follow me
10. What is the name of this tool: 
- a. Orbit
 - b. Circle
 - c. Pan
 - d. Follow me

G.M.C.S. - B.B.T.